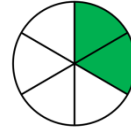

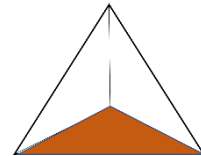
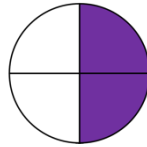


Aufgabe 1: Welche Abbildungen zeigen die gesuchten Brüche? Kreise ein.


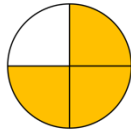
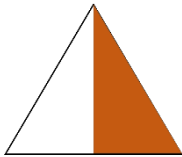
a) $\frac{1}{3}$



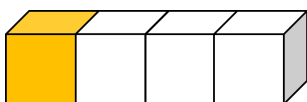
b) $\frac{1}{4}$

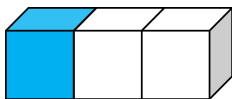


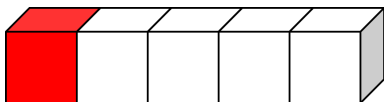
c) $\frac{1}{2}$

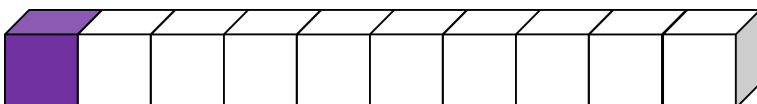


Aufgabe 2: Welcher Bruchanteil ist bunt? Schreibe den Bruch auf die Linie.






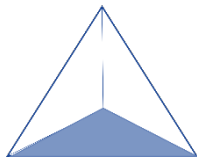
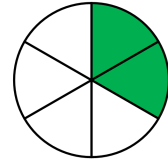




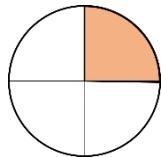

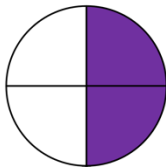

Aufgabe 3: Was passt zusammen? Verbinde.



$$\frac{1}{3}$$



$$\frac{1}{4}$$



$$\frac{1}{2}$$

