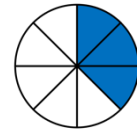
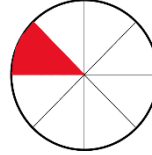
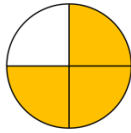
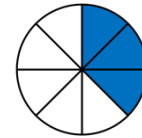



Aufgabe 1: Welche Abbildungen zeigen die gesuchten Brüche? Kreise ein.

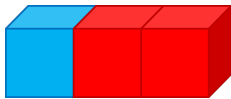
a) $\frac{3}{4}$



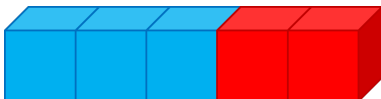
b) $\frac{2}{6}$



Aufgabe 2: Welcher Anteil ist rot? Schreibe den Bruch auf die Linie.

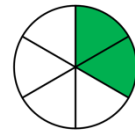
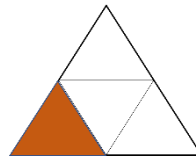








Aufgabe 3: Was passt zusammen? Verbinde.



$$\frac{3}{4}$$

$$\frac{3}{8}$$

$$\frac{1}{4}$$

$$\frac{2}{6}$$

$$\frac{1}{5}$$

$$\frac{2}{5}$$

